










15



ON BES





Aşağıdakilerden 15 yazan daireleri boyayalım.

15

15

11

7

14

12

10

14

15

9

13

12

3

11

13

15

14

13

6

15

4

8

15

14

12


10

15 Rakamını kullanarak resim çizelim?



Aşağıda kaç tane çilek var?
Çilekleri boyayıp 15 rakamlarının çizgilerinden giderek tamamlayalım.

15



15 15 15 15 15 15

15 15 15 15 15 15

15 15 15 15 15 15

15 15 15 15 15 15

15 15 15 15 15 15

15 15 15 15 15 15

15 sayısının kesik çizgilerinin üzerinden kalem ile çizelim, toplama/çıkarma işlemlerini yapalım.

